


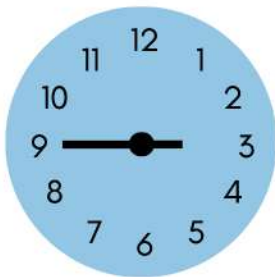
Nome: _____

Turma: _____

HORAS

Helena, Júlia, Bia e Larissa lançaram um clube de babás no bairro. Para dividir o faturamento, elas decidiram basear os cálculos de acordo com o tempo que trabalharam. Ajude-as a escrever o horário em que cada uma começou e terminou, bem como quanto tempo elas trabalharam.

Helena





Início: _____

Fim: _____

Tempo Total Trabalhado: _____

Júlia





Início: _____

Fim: _____

Tempo Total Trabalhado: _____

Bia





Início: _____

Fim: _____

Tempo Total Trabalhado: _____

Larissa



Início: _____

Fim: _____

Tempo Total Trabalhado: _____